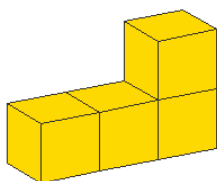
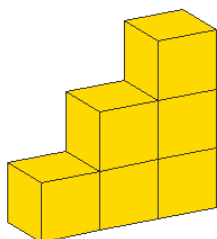


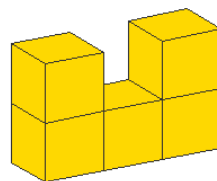
Határozd meg az alábbi 1 cm élhosszúságú kockákból kirakott alakzatok felszínét és térfogatát!



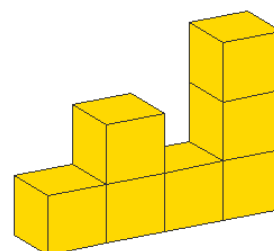
A =  
V =



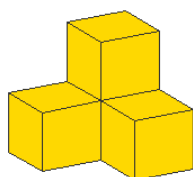
A =  
V =



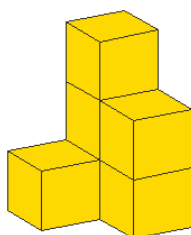
A =  
V =



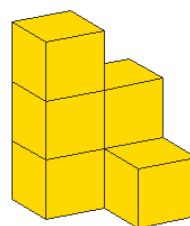
A =  
V =



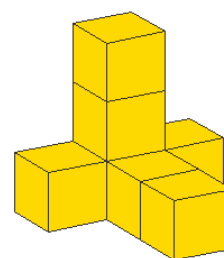
A =  
V =



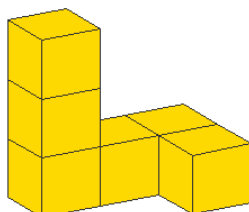
A =  
V =



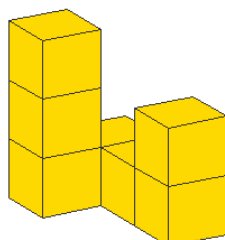
A =  
V =



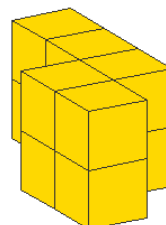
A =  
V =



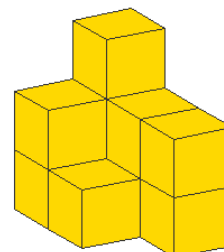
A =  
V =



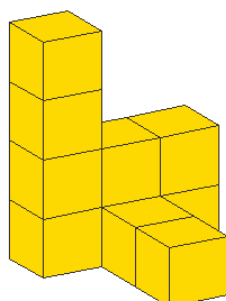
A =  
V =



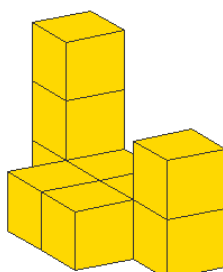
A =  
V =



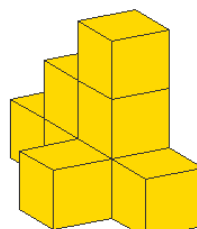
A =  
V =



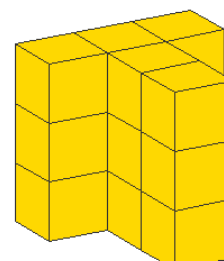
A =  
V =



A =  
V =



A =  
V =



A =  
V =