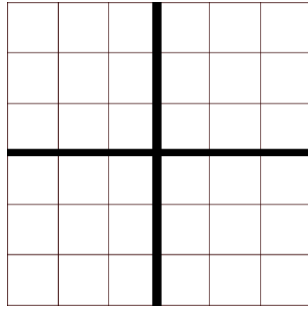
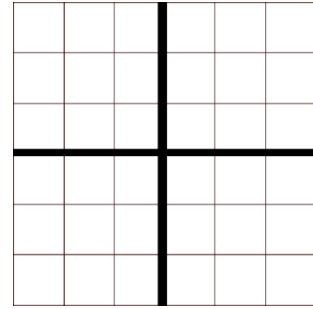


A négyzetrácsba beleírtuk, hogy egy kockából épített alakzathoz hol mennyi kockát használtunk fel. Rajzold meg az alakzat előlnézetét, oldalnézetét és felülnézetét.


2	3
1	2



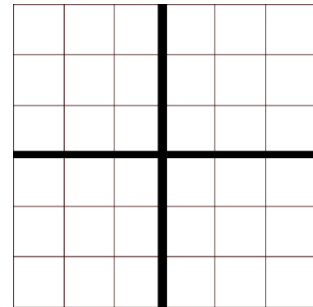
1	2	3
2	3	




1	2
	3



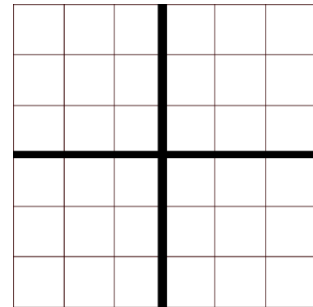
2	1	2
1		1




3	2
2	1



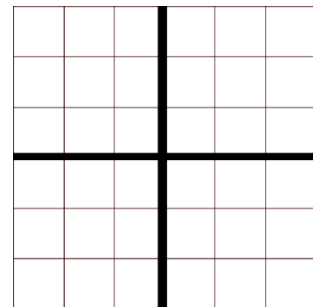
3		2
2	2	1




1	
3	2



1	3	
1	2	2



2	3
1	2



	1	3
1	1	2

